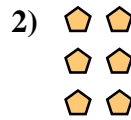




Write each array as an addition problem and solve.



Answers

Ex.  $2+2=4$

1. \_\_\_\_\_

2. \_\_\_\_\_

3. \_\_\_\_\_

4. \_\_\_\_\_

5. \_\_\_\_\_

6. \_\_\_\_\_

7. \_\_\_\_\_

8. \_\_\_\_\_

9. \_\_\_\_\_



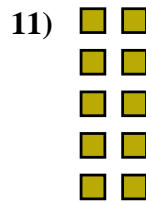





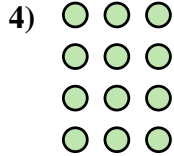
10. \_\_\_\_\_

11. \_\_\_\_\_

12. \_\_\_\_\_

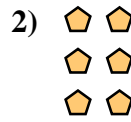
13. \_\_\_\_\_

14. \_\_\_\_\_





Write each array as an addition problem and solve.



Answers

Ex. 2+2=4

1. 3+3+3=9

2. 2+2+2=6

3. 3+3=6

4. 3+3+3+3=12

5. 2+2+2+2=8

6. 4+4+4+4=16

7. 5+5+5=15

8. 4+4+4+4+4=20

9. 4+4=8

10. 5+5+5+5+5=25

11. 2+2+2+2+2=10

12. 5+5=10

13. 3+3+3+3+3=15

14. 4+4+4=12

